



Name:


Date:

LO: We are learning that the Romans built towns across Britain.


Look at the map showing ancient Roman towns. Use a map of England to find out the modern names of the ancient Roman towns. Write the modern names below.





Eboracum  _____


Lindum  _____


Deva  _____


Aquae Sulis  _____


Venonis  _____

Verulamium  _____

Londinium  _____

Dubris  _____

Durnovaria  _____

Isca  _____

Explain how you found the modern names for these ancient Roman towns:

Roman Towns in Britain

Can you find the modern names of these Roman Towns?



Roman Towns in Britain

Teacher answer sheet



Note: There is no major modern settlement on the site of Venonis.

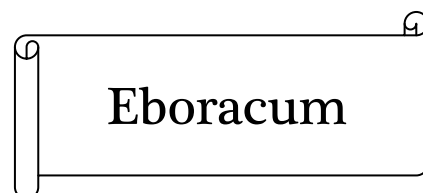

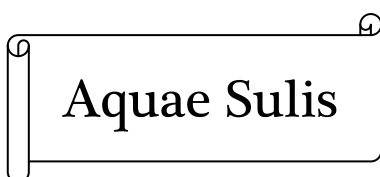
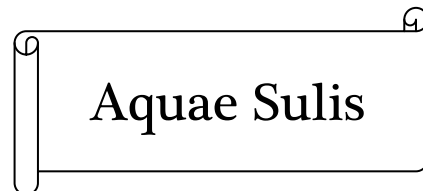

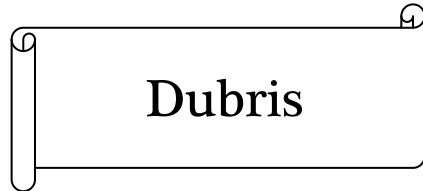

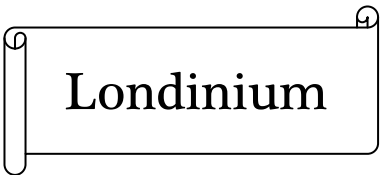

Name:

Date: **Resource J**

We are learning that the Romans built towns and roads across Britain.

Use the map showing the Roman towns and roads to answer these questions.

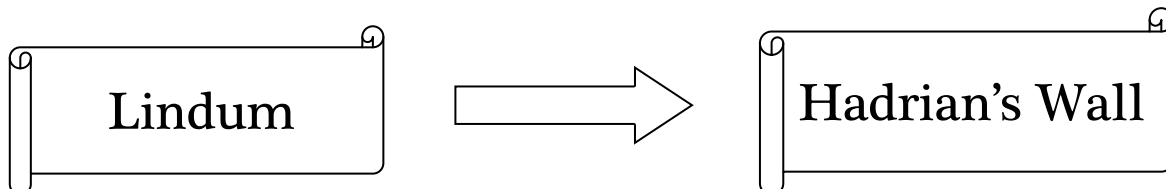
Which route would you take to get from:



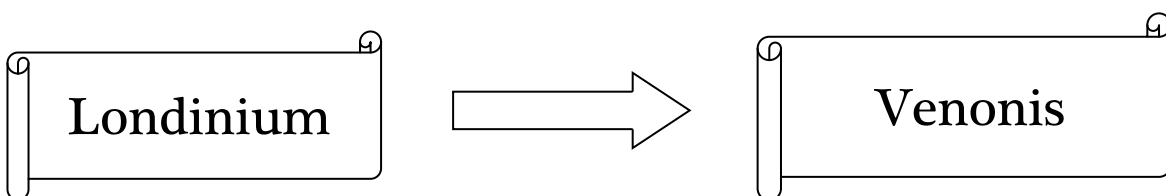
Teacher Answer Sheet

Use the map showing the Roman towns and roads to answer these questions.

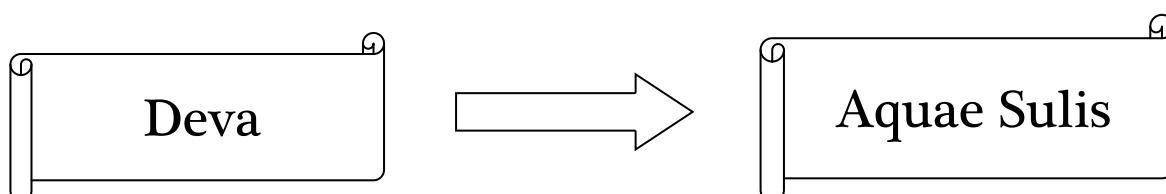
Which route would you take to get from:



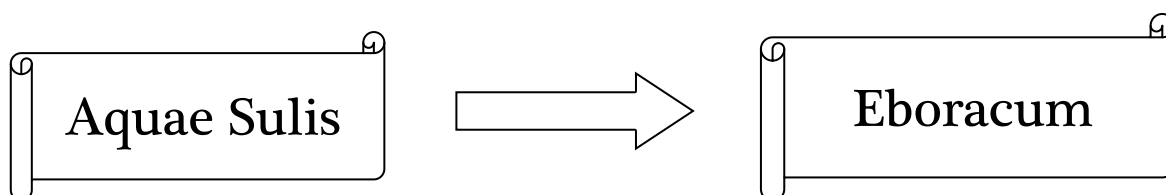
Ermine Street to Eboracum and then Dere Street to Hadrian's Wall



Watling Street to Venonis passing through Verulamium



Watling Street to Venonis and then Fosse Way to Aquae Sulis



Fosse Way to Lindum, passing through Venonis.
Then Ermine Street to Eboracum.